

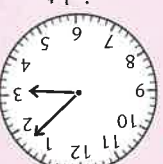









B Write the time shown on each of these clocks to the nearest minute:
 a) in words
 b) in figures using am and pm.

Digital clocks

1	3:12	afternoon
2	8:57	morning
3	6:24	evening
4	11:46	morning
5	2:51	afternoon
6	7:38	evening
7	5:27	night
8	10:19	morning
9	2:43	night
10	9:32	night

Analogue clocks

11		afternoon
12		morning
13		night
14		night
15		bedtime
16		morning
17		lunchtime
18		breakfast
19		night
20		afternoon

24-hour clocks always have four digits on display. Midnight is 00:00.

1 Copy and complete the table.

TIME IN WORDS		12-HOUR CLOCK	24-HOUR CLOCK
12 minutes to 5 in the morning	4:48 am	04:48	18:06
28 minutes to 2 in the afternoon	11:21 am	10:49 pm	05:05
14 minutes past midnight			
23 minutes past 4 in the afternoon	8:09 am	15:54	9:17 pm
7 minutes to 2 at night			

Examples

8:22 pm is 20:22
 6:48 am is 06:48