






**B** Write each time shown to the nearest minute:  
 a) in words  
 b) in figures using am or pm.


1  afternoon


2  afternoon


3  morning


4  evening


5  sunrise

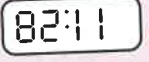
6  night


7  afternoon


8  morning


9  night


10  night


11  morning


12  breakfast


13  afternoon


14  evening


15  morning

16  afternoon

17  sunset

18  morning

19  afternoon

20  night

**Examples** 8:22 pm is 20:22  
 6:48 am is 06:48

24-hour clocks always have four digits on display. Midnight is 00:00.  
 Copy and complete the table.

24-HOUR CLOCK	12-HOUR CLOCK	TIME IN WORDS
16:27	4:27 pm	27 minutes past 4 in the afternoon
09:48	7:36 am	
13:02	10:53 pm	
09:48	8:21 pm	
23:57	5:38 am	
06:13	4:52 am	
10:29	2:49 pm	