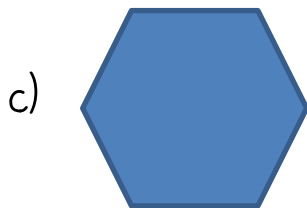

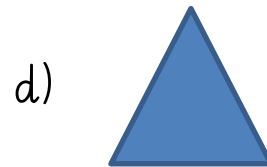
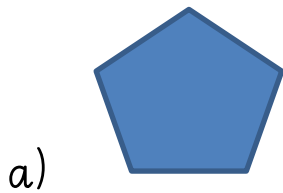


LO: To show understanding of 2-D shapes.

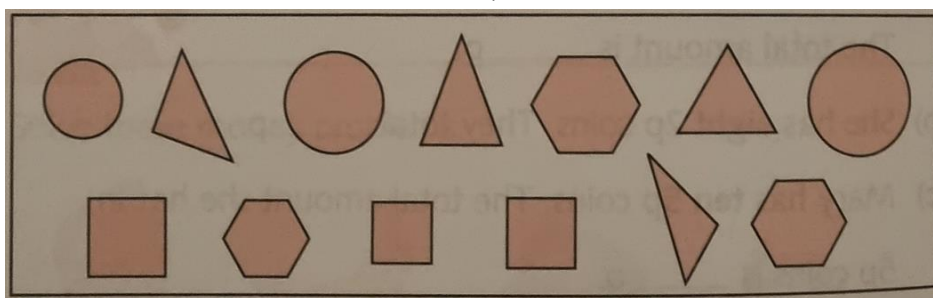


1. 2-D shapes are also known as **flat** shapes. Choosing from the given words, write the correct name next to each shape.

hexagon triangle pentagon circle rectangle



2. Find the number of each shape below.



- a) There are _____ triangles.
b) There are _____ squares.
c) There are _____ hexagons.
d) There are _____ circles.
e) How many shapes are there in total? _____