







LO: To be able to interpret a pictogram.



Animals	Tally	Number of Animals
Antelope		6
Elephant		4
Cheetah		2
Hippo		4
Lion		7
Zebra		5

1. Which animal was seen the most amount of times?
2. Which animal was seen the least amount of times?
3. How many lions and zebras were seen altogether?
4. How many more hippos were seen than cheetahs?
5. How many animals were seen altogether?

Extension – Why not create your own pictogram about anything such as how many insects you can find in your garden or how many trees you can see outside.